

Name _____

Class _____

Battle of Mohács

① TASK 1 – Write the dates on the timeline and events that belong to a particular date.

29th August 1541

1929

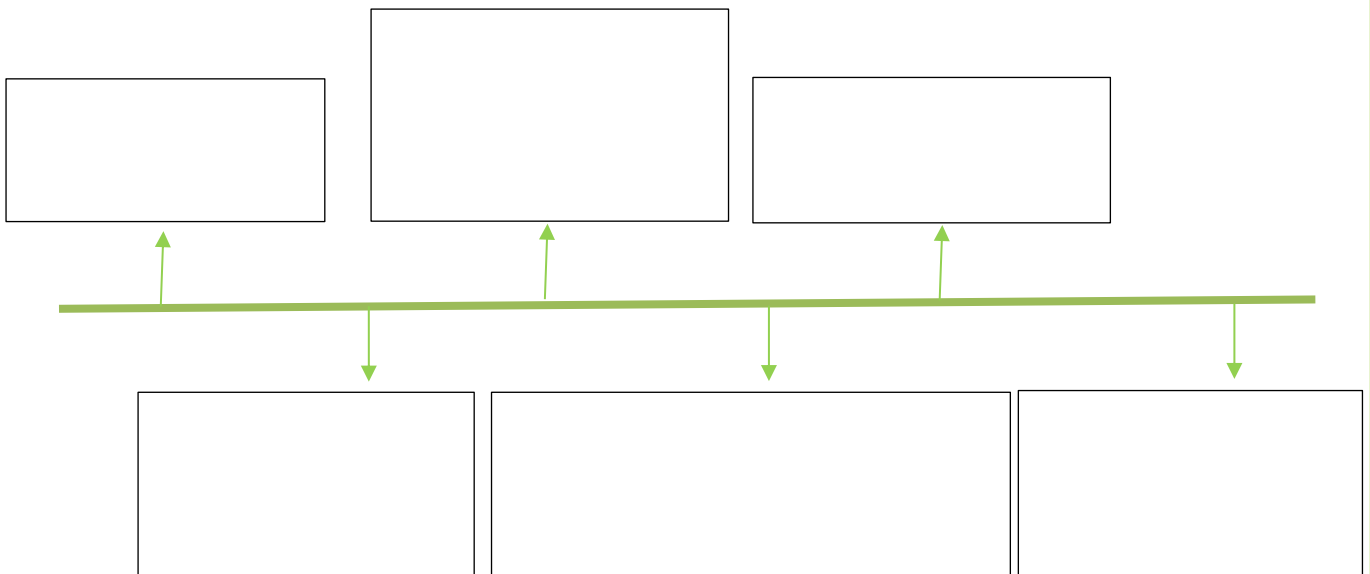
November 1526

24th February 1538

29th August 1526

November 1527

Timeline:



2 TASK 2 – Fill in the missing information.



The man in the picture is _____
_____. He was the most powerful man in
the Kingdom of Hungary and _____. In
_____, he was crowned
King of Hungary. He claimed the throne
because of the law that stated the following:

_____.



The man on the picture is _____
_____.
He was _____ of Austria and
King _____.
He claimed the throne because of the
agreement between _____
_____. The agreement stated that if one dynasty

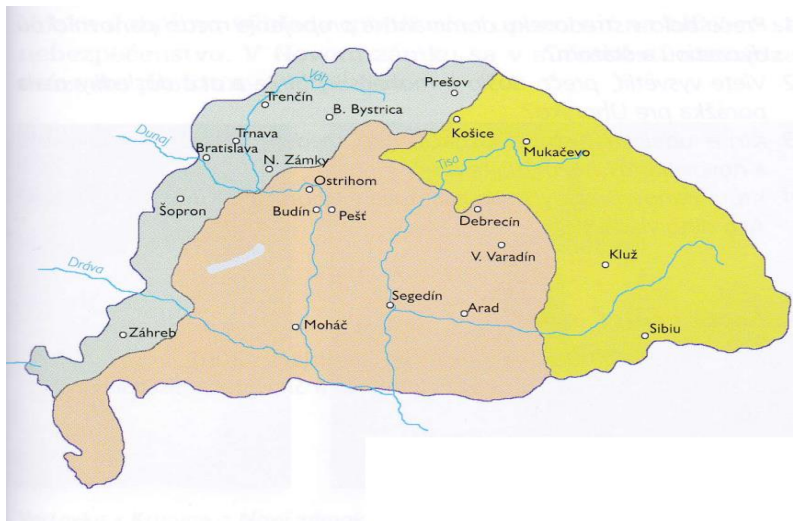
_____.

_____.

3 TASK 3 - Work with the map.

a) mark Pressburg and Buda on the map and write their present names.

b) In 1941 the Kingdom of Hungary was divided into three parts. Look at the map and write the name of a particular part next to the circle.



KEY:

① TASK 1 Write the dates on the timeline and events that belong to a particular date.

29th August 1541

1929

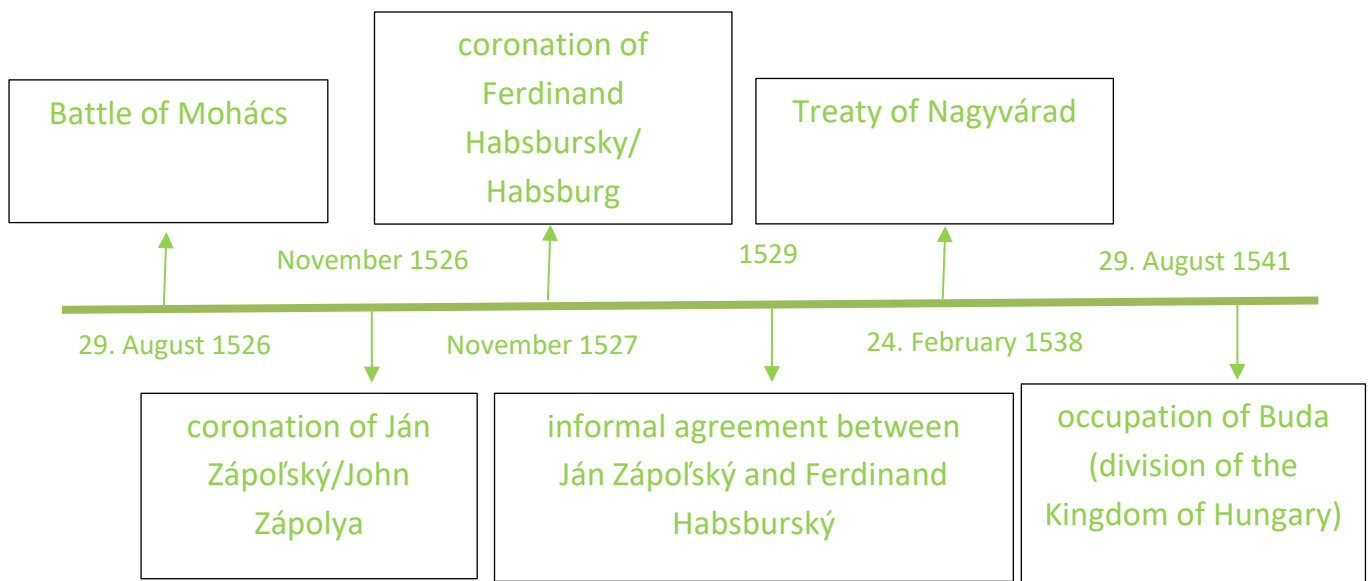
November 1526

24th February 1538

29th August 1526

November 1527

Timeline:



② TASK 2 Fill in missing information.



The man in the picture is Ján Zápoľský/John Zápolya. He was the most powerful man in the Kingdom of Hungary and the Voivode of Transylvania. In November 1526, he was crowned King of Hungary. He claimed the throne because of the law that stated the following: only a man from Hungary may be the king of Hungary.

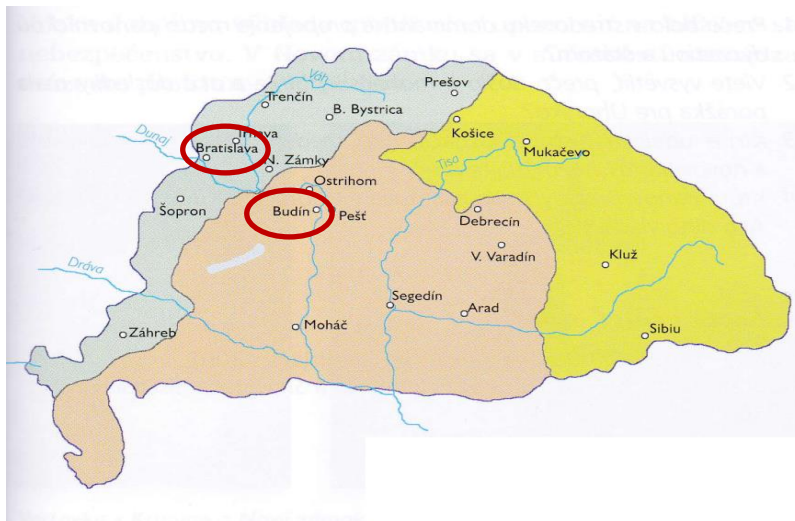


The man in the picture is Ferdinand Habsburský/Ferdinand Habsburg. He was Archduke of Austria and King Luis's brother-in-law. He claimed the throne because of the agreement between the Habsburg and Jagellion dynasty. The agreement stated that if one dynasty dies out, the second one will gain its throne.

3 TASK - Work with the map.

a) mark Pressburg and Buda on the map and write its present names.

b) In 1941 the Kingdom of Hungary was divided into three parts. Look at the map and write down the name of a particular part next to the circle



- Royal Hungary
- the territory belonging to the Ottoman Empire/Ottoman Hungary/Budin Eyelet
- Transylvania

Pressburg - Bratislava

Buda - Budapest