

Name _____

Class _____


CASTLES OF SLOVAKIA

① What belongs together? Write the correct number and letter in the table below. (for example, 2B)


1.




2.




3.




4.




5.



6.



7.



- a) Spiš Castle
- b) Orava Castle
- c) Bojnice Castle
- d) Smolenice Chateau
- e) Devín Castle
- f) Bratislava Castle
- g) The Castle of Trenčín

--	--	--	--	--	--	--

② Choose the correct answer:

1. Who was the most know aristocrat of the Castle of Trenčín?
 - a. Maria Theresa
 - b. Matúš Čak of Trenčín
 - c. Rudolf I
2. Which castle is part of the Museum of Coins and Medals?
 - a. Bratislava Castle
 - b. Bojnice Castle
 - c. Kremnica Town Castle
3. Which castle is the largest castle ruin in Central Europe?

- a. Devín Castle
- b. Modrý kameň Castle
- c. Spiš Castle

4. What is a dominant feature of Smolenice Chateau?

- a. Parks and forest
- b. A massive tower
- c. Colourful windows

5. What is Bojnice Castle called?

- a. "fairy-tale" castle
- b. "nightmare" castle
- c. castle of witches and vampires

6. Which unique museum is part of Modrý kameň Castle?

- a. Museum of books
- b. Museum of Puppets and Toys
- c. Museum of plates

7. What style is Orava Castle built in?


- a. Baroque style
- b. Renaissance and Neo-Gothic style
- c. Ancient Roman style

8. Which castle is on the hill above the Danube and Morava rivers?

- a. Bratislava Castle
- b. Devín Castle
- c. Smolenice Chateaux

③ Write down a short story (min. 10 sentences) using these words: king, castle, history, power, museum, UNESCO

Your story:

A large, empty rectangular box with a thin black border, intended for the student to write their short story. The box occupies the central and lower portion of the page.

KEY:

① TASK 1

1D	2E	3B	4A	5G	6C	7F
----	----	----	----	----	----	----

② TASK 2

1.B 2.C 3.C 4. B 5. A 6.B 7.B 8.B

③ TASK 3

Image sources

<https://nasedeticky.sk/predskolaci/slovensko/2668/hrady-zamky-slovenska/>